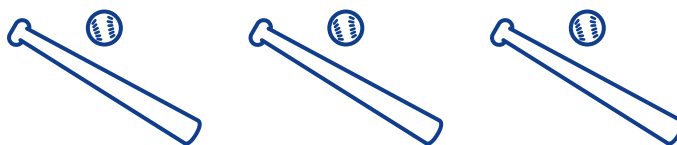


NAME: _____

Math Words

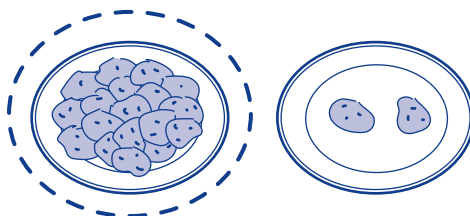
match



same



more



NAME: _____

Starter Problem

Do the rows have the same number of beans? Circle yes or no.



yes



no

Student Thinking

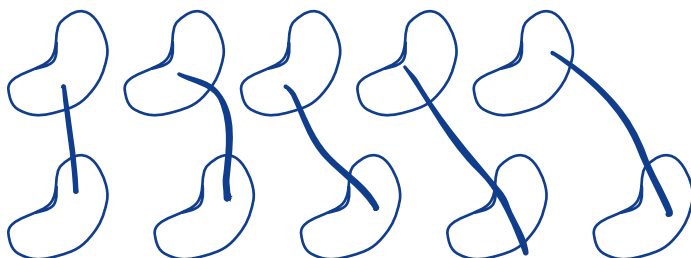


Tara

I drew lines to match the beans in each row. There are no extras.

They have the same number.

I counted to check.



yes


no

NAME: _____

Our Turn

Do the rows have the same number of beans?


1.



yes

no

2.



yes

no

NAME: _____

Mini Lesson

Do the rows have the same number of beans?

1.



yes



no

2.



yes



no

3.



yes



no